



NAME: _____



FULL SET (2s TO 12s)


POP



STAR



AIR



ROX



BOLT




ELECTRA




GROOVE



DAZZLE





BAZ



ALTO



VIBE

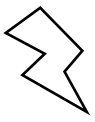


SCORE

BASELINE

CHECK 1

CHECK 2



BASELINE



Name: _____

Date: _____

1. $10 \times 5 =$ _____

21. $6 \times 3 =$ _____

41. $7 \times 7 =$ _____

2. $4 \times 4 =$ _____

22. $2 \times 1 =$ _____

42. $8 \times 1 =$ _____

3. $2 \times 5 =$ _____

23. $1 \times 9 =$ _____

43. $3 \times 12 =$ _____

4. $12 \times 3 =$ _____

24. $8 \times 5 =$ _____

44. $4 \times 11 =$ _____

5. $12 \times 12 =$ _____

25. $6 \times 8 =$ _____

45. $10 \times 8 =$ _____

6. $11 \times 12 =$ _____

26. $9 \times 2 =$ _____

46. $12 \times 11 =$ _____

7. $8 \times 6 =$ _____

27. $1 \times 3 =$ _____

47. $7 \times 6 =$ _____

8. $10 \times 3 =$ _____

28. $11 \times 8 =$ _____

48. $10 \times 9 =$ _____

9. $5 \times 6 =$ _____

29. $8 \times 12 =$ _____

49. $7 \times 4 =$ _____

10. $12 \times 4 =$ _____

30. $2 \times 10 =$ _____

50. $6 \times 11 =$ _____

11. $12 \times 3 =$ _____

31. $42 \div 7 =$ _____

51. $45 \div 5 =$ _____

12. $36 \div 12 =$ _____

32. $32 \div 8 =$ _____

52. $12 \div 3 =$ _____

13. $84 \div 7 =$ _____

33. $5 \div 1 =$ _____

53. $56 \div 8 =$ _____

14. $12 \div 6 =$ _____

34. $72 \div 8 =$ _____

54. $30 \div 10 =$ _____

15. $100 \div 10 =$ _____

35. $50 \div 10 =$ _____

55. $36 \div 9 =$ _____

16. $60 \div 6 =$ _____

36. $42 \div 6 =$ _____

56. $99 \div 11 =$ _____

17. $70 \div 7 =$ _____

37. $14 \div 2 =$ _____

57. $22 \div 2 =$ _____

18. $63 \div 9 =$ _____

38. $16 \div 4 =$ _____

58. $121 \div 11 =$ _____

19. $21 \div 3 =$ _____

39. $25 \div 5 =$ _____

59. $12 \div 4 =$ _____

20. $81 \div 9 =$ _____

40. $72 \div 6 =$ _____

60. $40 \div 4 =$ _____

SCORE:
(5 minute limit)

/60

TIME TAKEN (optional)

MINUTES SECONDS



Name: _____

MULTIPLICATION 1

Date: _____

Practise 2s, 3s, 4s, 5s, 6s, 7s, 8s, 9s, 10s, 11s, 12s

1. $6 \times 8 =$ _____

21. $4 \times 7 =$ _____

41. $5 \times 1 =$ _____

2. $3 \times 10 =$ _____

22. $1 \times 11 =$ _____

42. $10 \times 3 =$ _____

3. $9 \times 12 =$ _____

23. $12 \times 11 =$ _____

43. $12 \times 2 =$ _____

4. $9 \times 9 =$ _____

24. $5 \times 7 =$ _____

44. $1 \times 5 =$ _____

5. $7 \times 7 =$ _____

25. $11 \times 2 =$ _____

45. $12 \times 7 =$ _____

6. $4 \times 12 =$ _____

26. $8 \times 5 =$ _____

46. $3 \times 4 =$ _____

7. $1 \times 12 =$ _____

27. $10 \times 7 =$ _____

47. $7 \times 9 =$ _____

8. $8 \times 4 =$ _____

28. $12 \times 2 =$ _____

48. $9 \times 2 =$ _____

9. $12 \times 8 =$ _____

29. $9 \times 10 =$ _____

49. $6 \times 9 =$ _____

10. $11 \times 6 =$ _____

30. $7 \times 12 =$ _____

50. $8 \times 3 =$ _____

11. $3 \times 7 =$ _____

31. $1 \times 11 =$ _____

51. $8 \times 12 =$ _____

12. $2 \times 6 =$ _____

32. $6 \times 9 =$ _____

52. $9 \times 4 =$ _____

13. $10 \times 8 =$ _____

33. $11 \times 6 =$ _____

53. $8 \times 6 =$ _____

14. $12 \times 12 =$ _____

34. $8 \times 4 =$ _____

54. $11 \times 6 =$ _____

15. $4 \times 7 =$ _____

35. $2 \times 8 =$ _____

55. $7 \times 1 =$ _____

16. $9 \times 6 =$ _____

36. $2 \times 9 =$ _____

56. $10 \times 4 =$ _____

17. $11 \times 9 =$ _____

37. $7 \times 6 =$ _____

57. $8 \times 11 =$ _____

18. $11 \times 5 =$ _____

38. $4 \times 1 =$ _____

58. $7 \times 12 =$ _____

19. $7 \times 8 =$ _____

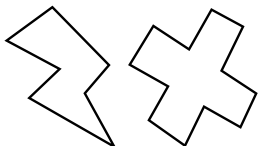
39. $3 \times 8 =$ _____

59. $3 \times 11 =$ _____

20. $8 \times 12 =$ _____

40. $6 \times 2 =$ _____

60. $4 \times 8 =$ _____



SCORE:

Grown-ups:
Can learners spot links between neighbouring questions?



Name: _____

MISSING NUMBER 1

Date: _____

Practise 2s, 3s, 4s, 5s, 6s, 7s, 8s, 9s, 10s, 11s, 12s

1. _____ \times 9 = 27

21. _____ \times 10 = 80

41. 1 \times _____ = 4

2. 10 \times _____ = 80

22. _____ \times 3 = 3

42. _____ \times 3 = 24

3. _____ \times 6 = 54

23. 4 \times _____ = 48

43. 8 \times _____ = 80

4. _____ \times 4 = 24

24. _____ \times 4 = 36

44. _____ \times 7 = 35

5. _____ \times 8 = 64

25. _____ \times 2 = 16

45. 10 \times _____ = 100

6. 11 \times _____ = 55

26. 10 \times _____ = 40

46. 5 \times _____ = 20

7. 1 \times _____ = 9

27. _____ \times 6 = 60

47. _____ \times 4 = 48

8. _____ \times 12 = 96

28. _____ \times 3 = 30

48. _____ \times 10 = 40

9. _____ \times 6 = 12

29. _____ \times 3 = 9

49. _____ \times 9 = 81

10. _____ \times 3 = 27

30. 8 \times _____ = 32

50. _____ \times 7 = 56

11. 9 \times _____ = 54

31. 11 \times _____ = 121

51. _____ \times 10 = 20

12. _____ \times 11 = 121

32. 8 \times _____ = 96

52. 6 \times _____ = 54

13. 4 \times _____ = 48

33. _____ \times 10 = 90

53. 5 \times _____ = 25

14. _____ \times 4 = 40

34. 11 \times _____ = 66

54. 7 \times _____ = 42

15. _____ \times 3 = 18

35. _____ \times 3 = 30

55. 2 \times _____ = 18

16. _____ \times 2 = 24

36. 6 \times _____ = 24

56. _____ \times 8 = 56

17. 7 \times _____ = 56

37. _____ \times 6 = 66

57. 12 \times _____ = 72

18. _____ \times 12 = 96

38. _____ \times 5 = 10

58. 9 \times _____ = 81

19. 10 \times _____ = 120

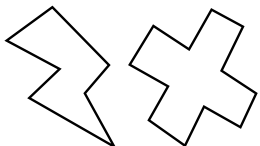
39. _____ \times 2 = 22

59. _____ \times 7 = 7

20. _____ \times 8 = 72

40. _____ \times 9 = 90

60. _____ \times 4 = 32



SCORE:

Grown-ups:
Can learners spot links between neighbouring questions?



Name: _____

DIVISION 1

Date: _____

Practise 2s, 3s, 4s, 5s, 6s, 7s, 8s, 9s, 10s, 11s, 12s

1. $40 \div 4 =$ _____

21. $24 \div 6 =$ _____

41. $22 \div 2 =$ _____

2. $14 \div 2 =$ _____

22. $54 \div 9 =$ _____

42. $100 \div 10 =$ _____

3. $44 \div 11 =$ _____

23. $56 \div 7 =$ _____

43. $18 \div 2 =$ _____

4. $4 \div 2 =$ _____

24. $6 \div 1 =$ _____

44. $9 \div 9 =$ _____

5. $72 \div 9 =$ _____

25. $12 \div 1 =$ _____

45. $27 \div 9 =$ _____

6. $32 \div 8 =$ _____

26. $18 \div 9 =$ _____

46. $10 \div 5 =$ _____

7. $121 \div 11 =$ _____

27. $7 \div 1 =$ _____

47. $22 \div 11 =$ _____

8. $30 \div 10 =$ _____

28. $90 \div 9 =$ _____

48. $88 \div 8 =$ _____

9. $48 \div 12 =$ _____

29. $42 \div 7 =$ _____

49. $56 \div 8 =$ _____

10. $84 \div 12 =$ _____

30. $30 \div 5 =$ _____

50. $72 \div 12 =$ _____

11. $77 \div 7 =$ _____

31. $18 \div 6 =$ _____

51. $28 \div 4 =$ _____

12. $25 \div 5 =$ _____

32. $4 \div 2 =$ _____

52. $18 \div 6 =$ _____

13. $30 \div 3 =$ _____

33. $21 \div 3 =$ _____

53. $9 \div 3 =$ _____

14. $88 \div 8 =$ _____

34. $48 \div 6 =$ _____

54. $16 \div 2 =$ _____

15. $18 \div 6 =$ _____

35. $40 \div 10 =$ _____

55. $18 \div 6 =$ _____

16. $16 \div 8 =$ _____

36. $96 \div 12 =$ _____

56. $16 \div 2 =$ _____

17. $22 \div 2 =$ _____

37. $72 \div 8 =$ _____

57. $45 \div 9 =$ _____

18. $42 \div 6 =$ _____

38. $45 \div 9 =$ _____

58. $30 \div 10 =$ _____

19. $63 \div 9 =$ _____

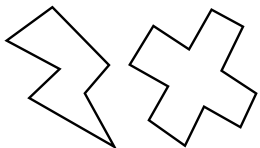
39. $12 \div 3 =$ _____

59. $24 \div 8 =$ _____

20. $42 \div 6 =$ _____

40. $28 \div 7 =$ _____

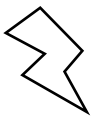
60. $33 \div 11 =$ _____



SCORE:

Grown-ups:
Can learners spot links between neighbouring questions?





CHECK 1



Name: _____

Date: _____

1. $2 \times 12 =$ _____

21. $5 \times 2 =$ _____

41. $11 \times 12 =$ _____

2. $4 \times 8 =$ _____

22. $1 \times 3 =$ _____

42. $7 \times 11 =$ _____

3. $3 \times 6 =$ _____

23. $7 \times 6 =$ _____

43. $3 \times 6 =$ _____

4. $1 \times 7 =$ _____

24. $7 \times 8 =$ _____

44. $7 \times 2 =$ _____

5. $8 \times 5 =$ _____

25. $5 \times 3 =$ _____

45. $11 \times 2 =$ _____

6. $8 \times 10 =$ _____

26. $2 \times 7 =$ _____

46. $4 \times 5 =$ _____

7. $2 \times 12 =$ _____

27. $8 \times 6 =$ _____

47. $10 \times 5 =$ _____

8. $2 \times 3 =$ _____

28. $10 \times 3 =$ _____

48. $10 \times 3 =$ _____

9. $2 \times 4 =$ _____

29. $4 \times 12 =$ _____

49. $1 \times 6 =$ _____

10. $12 \times 1 =$ _____

30. $7 \times 7 =$ _____

50. $5 \times 2 =$ _____

11. $3 \times 1 =$ _____

31. $22 \div 11 =$ _____

51. $96 \div 12 =$ _____

12. $132 \div 11 =$ _____

32. $27 \div 3 =$ _____

52. $49 \div 7 =$ _____

13. $100 \div 10 =$ _____

33. $30 \div 6 =$ _____

53. $12 \div 4 =$ _____

14. $70 \div 10 =$ _____

34. $72 \div 8 =$ _____

54. $18 \div 9 =$ _____

15. $36 \div 4 =$ _____

35. $36 \div 3 =$ _____

55. $40 \div 10 =$ _____

16. $2 \div 2 =$ _____

36. $48 \div 6 =$ _____

56. $120 \div 10 =$ _____

17. $30 \div 10 =$ _____

37. $42 \div 7 =$ _____

57. $66 \div 11 =$ _____

18. $96 \div 8 =$ _____

38. $15 \div 3 =$ _____

58. $48 \div 12 =$ _____

19. $32 \div 8 =$ _____

39. $64 \div 8 =$ _____

59. $5 \div 5 =$ _____

20. $16 \div 8 =$ _____

40. $12 \div 12 =$ _____

60. $14 \div 2 =$ _____

SCORE:
(5 minute limit)

/60

TIME TAKEN (optional)

MINUTES SECONDS



Name: _____

MULTIPLICATION 2

Date: _____

Practise 2s, 3s, 4s, 5s, 6s, 7s, 8s, 9s, 10s, 11s, 12s

1. $7 \times 12 =$ _____

21. $8 \times 2 =$ _____

41. $8 \times 9 =$ _____

2. $1 \times 3 =$ _____

22. $12 \times 5 =$ _____

42. $9 \times 4 =$ _____

3. $6 \times 10 =$ _____

23. $3 \times 3 =$ _____

43. $11 \times 9 =$ _____

4. $10 \times 8 =$ _____

24. $8 \times 3 =$ _____

44. $9 \times 6 =$ _____

5. $7 \times 10 =$ _____

25. $5 \times 3 =$ _____

45. $9 \times 6 =$ _____

6. $6 \times 1 =$ _____

26. $2 \times 8 =$ _____

46. $1 \times 12 =$ _____

7. $7 \times 9 =$ _____

27. $3 \times 5 =$ _____

47. $9 \times 4 =$ _____

8. $5 \times 3 =$ _____

28. $9 \times 10 =$ _____

48. $2 \times 5 =$ _____

9. $1 \times 10 =$ _____

29. $8 \times 2 =$ _____

49. $3 \times 5 =$ _____

10. $5 \times 5 =$ _____

30. $12 \times 9 =$ _____

50. $4 \times 4 =$ _____

11. $12 \times 2 =$ _____

31. $4 \times 5 =$ _____

51. $2 \times 8 =$ _____

12. $2 \times 6 =$ _____

32. $8 \times 4 =$ _____

52. $9 \times 9 =$ _____

13. $4 \times 8 =$ _____

33. $11 \times 12 =$ _____

53. $3 \times 5 =$ _____

14. $5 \times 6 =$ _____

34. $8 \times 1 =$ _____

54. $12 \times 2 =$ _____

15. $7 \times 4 =$ _____

35. $9 \times 2 =$ _____

55. $11 \times 10 =$ _____

16. $8 \times 1 =$ _____

36. $3 \times 7 =$ _____

56. $6 \times 6 =$ _____

17. $6 \times 8 =$ _____

37. $2 \times 3 =$ _____

57. $7 \times 11 =$ _____

18. $3 \times 2 =$ _____

38. $4 \times 6 =$ _____

58. $12 \times 6 =$ _____

19. $3 \times 4 =$ _____

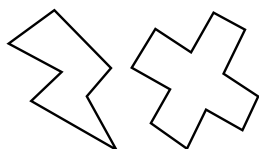
39. $6 \times 10 =$ _____

59. $10 \times 8 =$ _____

20. $1 \times 9 =$ _____

40. $6 \times 8 =$ _____

60. $10 \times 12 =$ _____



SCORE:

Grown-ups:
Can learners spot links between neighbouring questions?



Name: _____

MISSING NUMBER 2

Date: _____

Practise 2s, 3s, 4s, 5s, 6s, 7s, 8s, 9s, 10s, 11s, 12s

1. $1 \times \underline{\quad} = 6$

21. $3 \times \underline{\quad} = 27$

41. $5 \times \underline{\quad} = 15$

2. $2 \times \underline{\quad} = 16$

22. $7 \times \underline{\quad} = 49$

42. $\underline{\quad} \times 11 = 132$

3. $7 \times \underline{\quad} = 42$

23. $\underline{\quad} \times 4 = 4$

43. $\underline{\quad} \times 11 = 77$

4. $\underline{\quad} \times 2 = 10$

24. $6 \times \underline{\quad} = 18$

44. $\underline{\quad} \times 9 = 63$

5. $9 \times \underline{\quad} = 99$

25. $\underline{\quad} \times 4 = 44$

45. $1 \times \underline{\quad} = 6$

6. $\underline{\quad} \times 7 = 14$

26. $8 \times \underline{\quad} = 8$

46. $8 \times \underline{\quad} = 32$

7. $\underline{\quad} \times 1 = 7$

27. $9 \times \underline{\quad} = 54$

47. $\underline{\quad} \times 8 = 64$

8. $10 \times \underline{\quad} = 20$

28. $\underline{\quad} \times 4 = 32$

48. $\underline{\quad} \times 2 = 4$

9. $11 \times \underline{\quad} = 66$

29. $2 \times \underline{\quad} = 6$

49. $\underline{\quad} \times 12 = 132$

10. $7 \times \underline{\quad} = 14$

30. $3 \times \underline{\quad} = 9$

50. $8 \times \underline{\quad} = 88$

11. $6 \times \underline{\quad} = 18$

31. $\underline{\quad} \times 6 = 6$

51. $11 \times \underline{\quad} = 77$

12. $\underline{\quad} \times 5 = 25$

32. $8 \times \underline{\quad} = 96$

52. $\underline{\quad} \times 4 = 28$

13. $12 \times \underline{\quad} = 36$

33. $5 \times \underline{\quad} = 20$

53. $\underline{\quad} \times 3 = 33$

14. $6 \times \underline{\quad} = 48$

34. $\underline{\quad} \times 2 = 2$

54. $7 \times \underline{\quad} = 35$

15. $9 \times \underline{\quad} = 45$

35. $2 \times \underline{\quad} = 10$

55. $3 \times \underline{\quad} = 9$

16. $\underline{\quad} \times 12 = 84$

36. $\underline{\quad} \times 9 = 9$

56. $\underline{\quad} \times 1 = 11$

17. $\underline{\quad} \times 10 = 30$

37. $4 \times \underline{\quad} = 40$

57. $9 \times \underline{\quad} = 72$

18. $\underline{\quad} \times 6 = 18$

38. $\underline{\quad} \times 7 = 42$

58. $\underline{\quad} \times 11 = 88$

19. $\underline{\quad} \times 8 = 16$

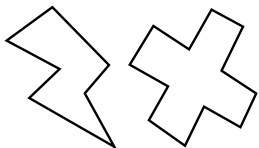
39. $\underline{\quad} \times 4 = 40$

59. $\underline{\quad} \times 10 = 30$

20. $\underline{\quad} \times 7 = 28$

40. $\underline{\quad} \times 5 = 10$

60. $\underline{\quad} \times 5 = 50$



SCORE:

Grown-ups:
Can learners spot links between neighbouring questions?



Name: _____

DIVISION 2

Date: _____

Practise 2s, 3s, 4s, 5s, 6s, 7s, 8s, 9s, 10s, 11s, 12s

1. $72 \div 12 =$ _____

21. $4 \div 4 =$ _____

41. $24 \div 2 =$ _____

2. $18 \div 9 =$ _____

22. $40 \div 10 =$ _____

42. $80 \div 10 =$ _____

3. $32 \div 8 =$ _____

23. $36 \div 9 =$ _____

43. $40 \div 10 =$ _____

4. $15 \div 3 =$ _____

24. $10 \div 1 =$ _____

44. $36 \div 6 =$ _____

5. $96 \div 8 =$ _____

25. $144 \div 12 =$ _____

45. $11 \div 1 =$ _____

6. $20 \div 10 =$ _____

26. $8 \div 4 =$ _____

46. $16 \div 4 =$ _____

7. $6 \div 2 =$ _____

27. $84 \div 12 =$ _____

47. $36 \div 4 =$ _____

8. $27 \div 3 =$ _____

28. $6 \div 6 =$ _____

48. $56 \div 7 =$ _____

9. $49 \div 7 =$ _____

29. $121 \div 11 =$ _____

49. $35 \div 5 =$ _____

10. $9 \div 3 =$ _____

30. $64 \div 8 =$ _____

50. $18 \div 6 =$ _____

11. $10 \div 1 =$ _____

31. $54 \div 9 =$ _____

51. $30 \div 10 =$ _____

12. $54 \div 9 =$ _____

32. $72 \div 6 =$ _____

52. $48 \div 8 =$ _____

13. $120 \div 10 =$ _____

33. $16 \div 2 =$ _____

53. $36 \div 3 =$ _____

14. $36 \div 3 =$ _____

34. $6 \div 3 =$ _____

54. $96 \div 8 =$ _____

15. $16 \div 4 =$ _____

35. $24 \div 8 =$ _____

55. $48 \div 6 =$ _____

16. $21 \div 3 =$ _____

36. $33 \div 3 =$ _____

56. $44 \div 11 =$ _____

17. $22 \div 2 =$ _____

37. $81 \div 9 =$ _____

57. $84 \div 12 =$ _____

18. $32 \div 4 =$ _____

38. $10 \div 10 =$ _____

58. $10 \div 2 =$ _____

19. $35 \div 7 =$ _____

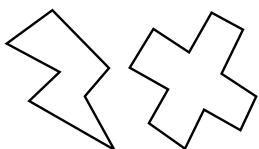
39. $12 \div 6 =$ _____

59. $33 \div 11 =$ _____

20. $32 \div 8 =$ _____

40. $12 \div 2 =$ _____

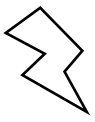
60. $15 \div 3 =$ _____



SCORE:

Grown-ups:
Can learners spot links between neighbouring questions?





CHECK 2



Name: _____

Date: _____

1. $3 \times 10 =$ _____

21. $2 \times 2 =$ _____

41. $7 \times 9 =$ _____

2. $1 \times 9 =$ _____

22. $4 \times 12 =$ _____

42. $6 \times 7 =$ _____

3. $2 \times 4 =$ _____

23. $7 \times 3 =$ _____

43. $5 \times 3 =$ _____

4. $1 \times 8 =$ _____

24. $8 \times 8 =$ _____

44. $5 \times 10 =$ _____

5. $9 \times 2 =$ _____

25. $7 \times 5 =$ _____

45. $11 \times 8 =$ _____

6. $7 \times 2 =$ _____

26. $9 \times 11 =$ _____

46. $10 \times 11 =$ _____

7. $9 \times 1 =$ _____

27. $4 \times 4 =$ _____

47. $5 \times 8 =$ _____

8. $8 \times 3 =$ _____

28. $4 \times 2 =$ _____

48. $6 \times 4 =$ _____

9. $6 \times 11 =$ _____

29. $2 \times 11 =$ _____

49. $1 \times 2 =$ _____

10. $3 \times 9 =$ _____

30. $11 \times 4 =$ _____

50. $9 \times 2 =$ _____

11. $5 \times 9 =$ _____

31. $16 \div 2 =$ _____

51. $2 \div 2 =$ _____

12. $54 \div 6 =$ _____

32. $7 \div 1 =$ _____

52. $45 \div 9 =$ _____

13. $90 \div 9 =$ _____

33. $6 \div 3 =$ _____

53. $120 \div 10 =$ _____

14. $15 \div 3 =$ _____

34. $32 \div 8 =$ _____

54. $36 \div 6 =$ _____

15. $90 \div 10 =$ _____

35. $12 \div 3 =$ _____

55. $15 \div 3 =$ _____

16. $72 \div 9 =$ _____

36. $20 \div 10 =$ _____

56. $24 \div 6 =$ _____

17. $30 \div 6 =$ _____

37. $12 \div 6 =$ _____

57. $77 \div 11 =$ _____

18. $70 \div 7 =$ _____

38. $16 \div 4 =$ _____

58. $11 \div 11 =$ _____

19. $8 \div 1 =$ _____

39. $42 \div 7 =$ _____

59. $9 \div 9 =$ _____

20. $21 \div 7 =$ _____

40. $84 \div 7 =$ _____

60. $32 \div 8 =$ _____

SCORE:
(5 minute limit)

/60

TIME TAKEN (optional)

| | |
|----------------------|----------------------|
| <input type="text"/> | <input type="text"/> |
|----------------------|----------------------|

MINUTES SECONDS

